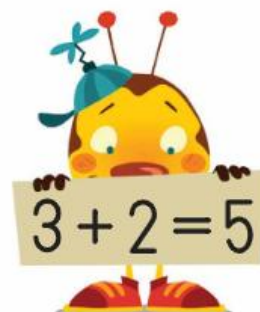
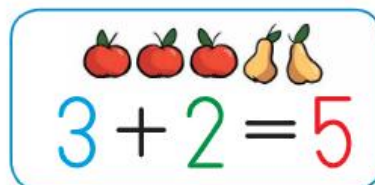
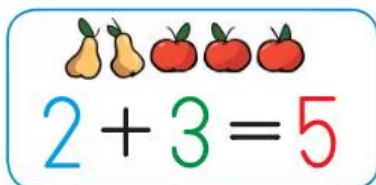



LILI IN BINE STA SI OGLEDALA KOŠARO S SADJEM. VSAK JE NA LIST NAPISAL MATEMATIČNI ZAPIS ZA ENAKOST.



KAKO STA LILI IN BINE RAČUNALA?



$$2 + 3 = 5$$



$$2 + 3 = 3 + 2$$